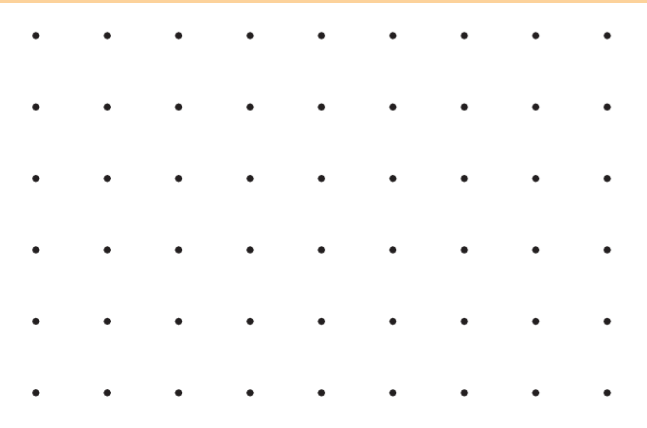



1. Draw a shape to match each label.

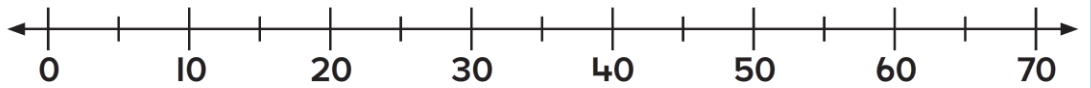
a. a triangle with no sides the same length



b. a quadrilateral with exactly two sides the same length



2. Figure out the difference. Draw jumps to show your thinking. Then write the subtraction sentence.



\_\_\_\_\_ - \_\_\_\_\_ = \_\_\_\_\_

3. Write a number sentence to show how you could **estimate** the total cost.

a. **see** → \$49 + \$37

**think** → \$ 50 + \$ 37

b. **see** → \$38 + \$17

**think** → \$ \_\_\_\_\_ + \$ \_\_\_\_\_

c. **see** → \$56 + \$19

**think** → \$ \_\_\_\_\_ + \$ \_\_\_\_\_

d. **see** → \$28 + \$34

**think** → \$ \_\_\_\_\_ + \$ \_\_\_\_\_